

Mr. Williams - AP Human Geography – Summer Work 2022

Hello future geographers! Thank you for choosing to be a part of APHUG. Upon entering an AP class it is important to have some background knowledge and skills. In addition to reading *Happy City*, the following maps will start you on your journey toward success. Both the book and the maps are due the first day of school.

PART I - HAPPY CITY: The summer reading is *Happy City*, by Charles Montgomery. You will be tested on the book the first week of school.

WHAT TO FOCUS ON:

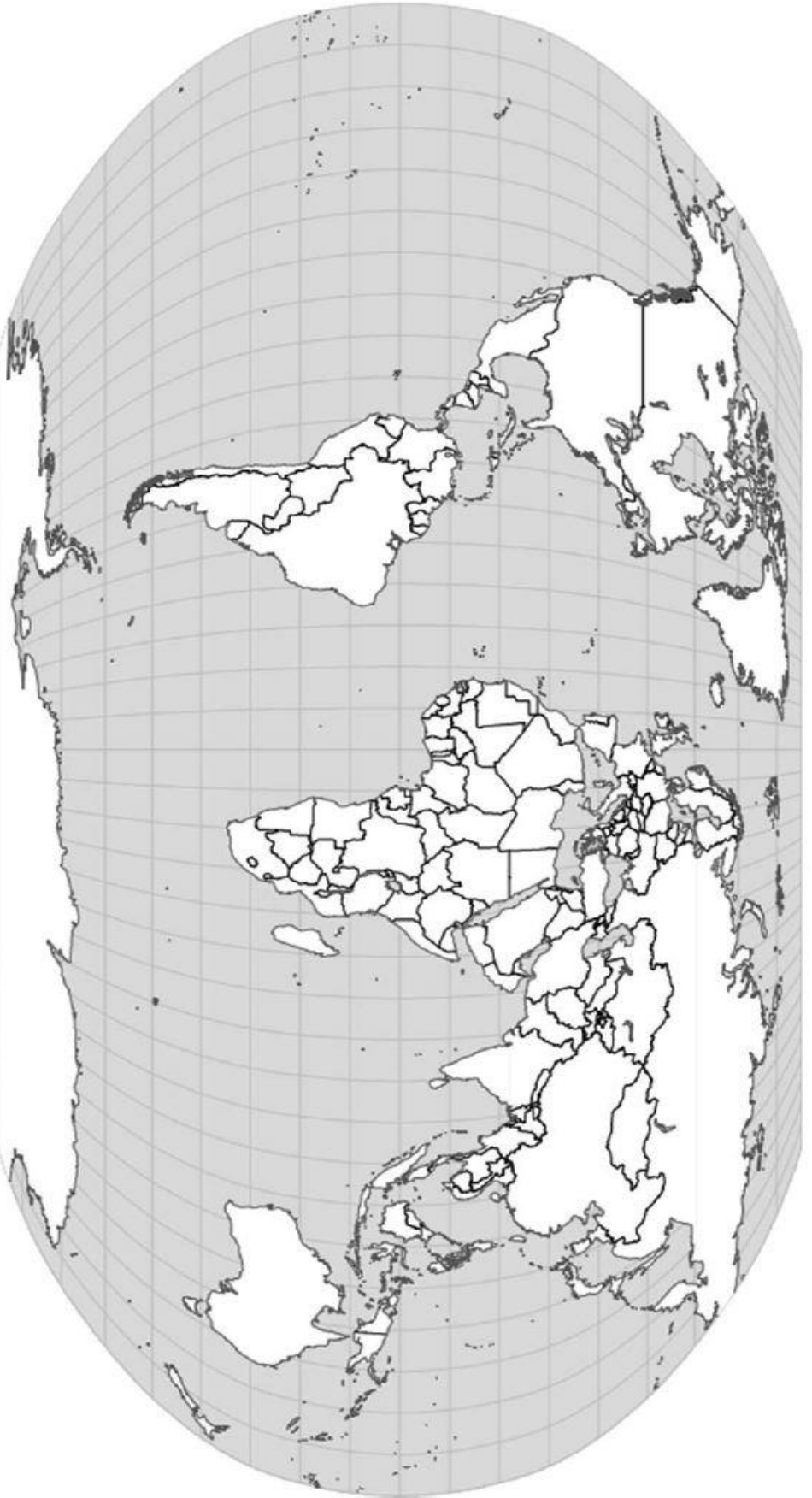
1. What is the meaning of each chapter title?
2. What are the problems with our cities? What research proves these are problems? Why do these problems exist?
3. What are the solutions to the problems? What is the proof these solutions work?
4. What issues are not included in the book/minimized?

HOW TO FOCUS: Be an active reader! Highlighting/bookmarking text is passive reading that you will forget in 2 days. Instead, here are some tips (coming from research in psychology) on how to actively read and how I will expect you to read for this class -

1. Take notes BY HAND.
2. Be selective in what you choose to write down. Focus on key events, people, places, terms. For *Happy City*, for example, I gave myself 1 page of space for notes per chapter (if you write bigger you may have slightly more).
3. Highlighting/bookmarking is passive. Instead, for reference, write the pg. # in the left hand margin of your notebook next to important notes.
4. Include notes on how you feel - do you agree/disagree? Is it misguided, racist, enlightened, etc.?
5. Summarize each chapter after you finished reading it in 1-2 sentences.
6. Lastly, use arrows, pictures, draw diagrams - images/symbols assist comprehension more than lines of notes.

PART II - MAP: Print out and label BY HAND all **11** of the attached maps with the features listed below each map. Label each element with the correct number in the correct location. Countries are listed in regular font and cities are listed in *italics*. We will have map quizzes at the start of the year and in each unit, so it will be important for you to keep your map packet for review purposes.

Map 1: Basics



Label the following:

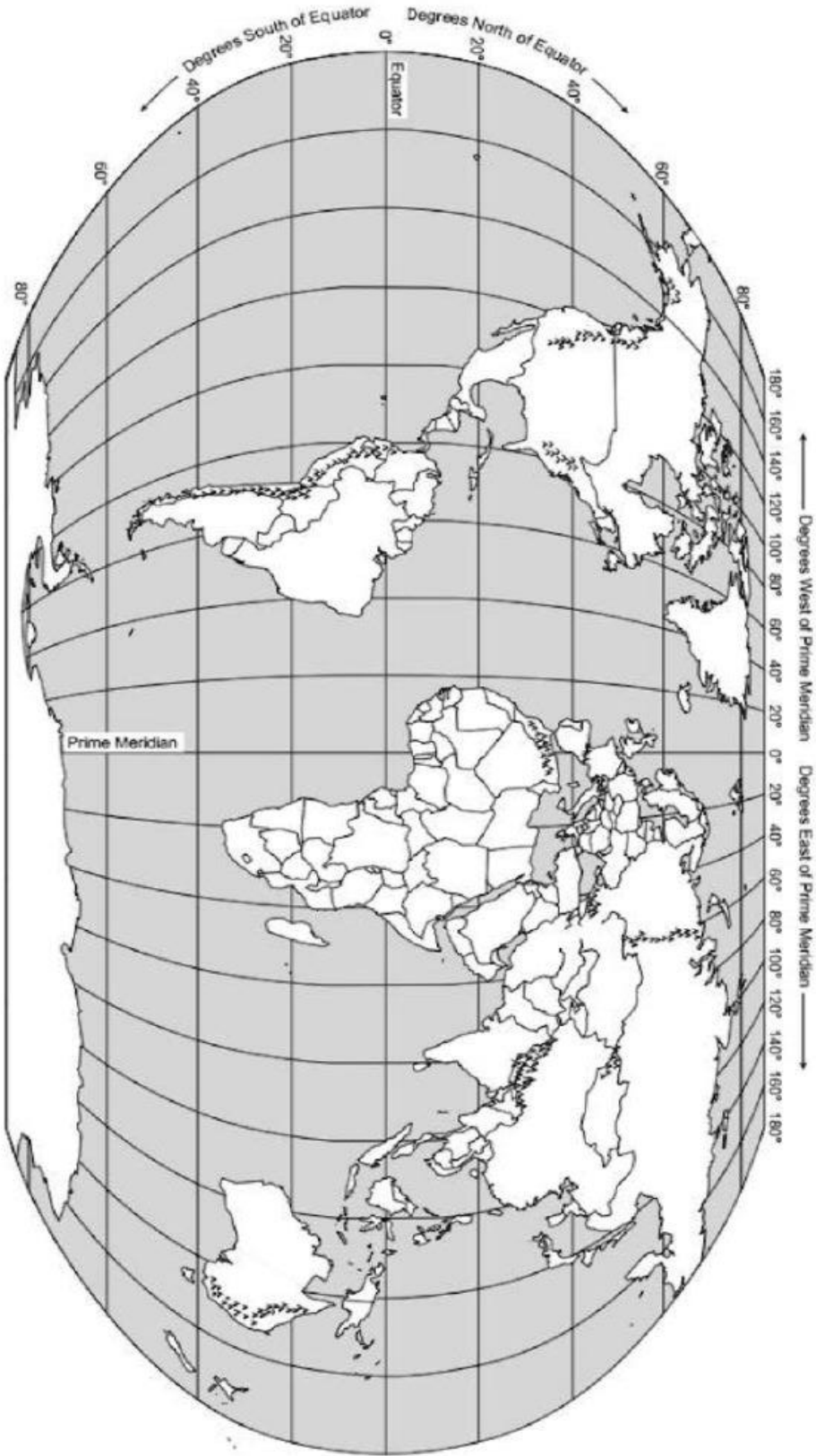
- | | | | | |
|---------------|------------------|------------------|-------------------------|---------------------|
| 5 Oceans | 7 Continents | Tropic of Cancer | Equator | Tropic of Capricorn |
| Arctic Circle | Antarctic Circle | Prime Meridian | International Date Line | Southern Ocean |

After labeling Map 1, complete the following sentences:

Lines of latitude run from _____ to _____ and measure distances _____ and _____ of the _____.

Lines of longitude run from _____ to _____ and measure distances _____ and _____ of the _____.

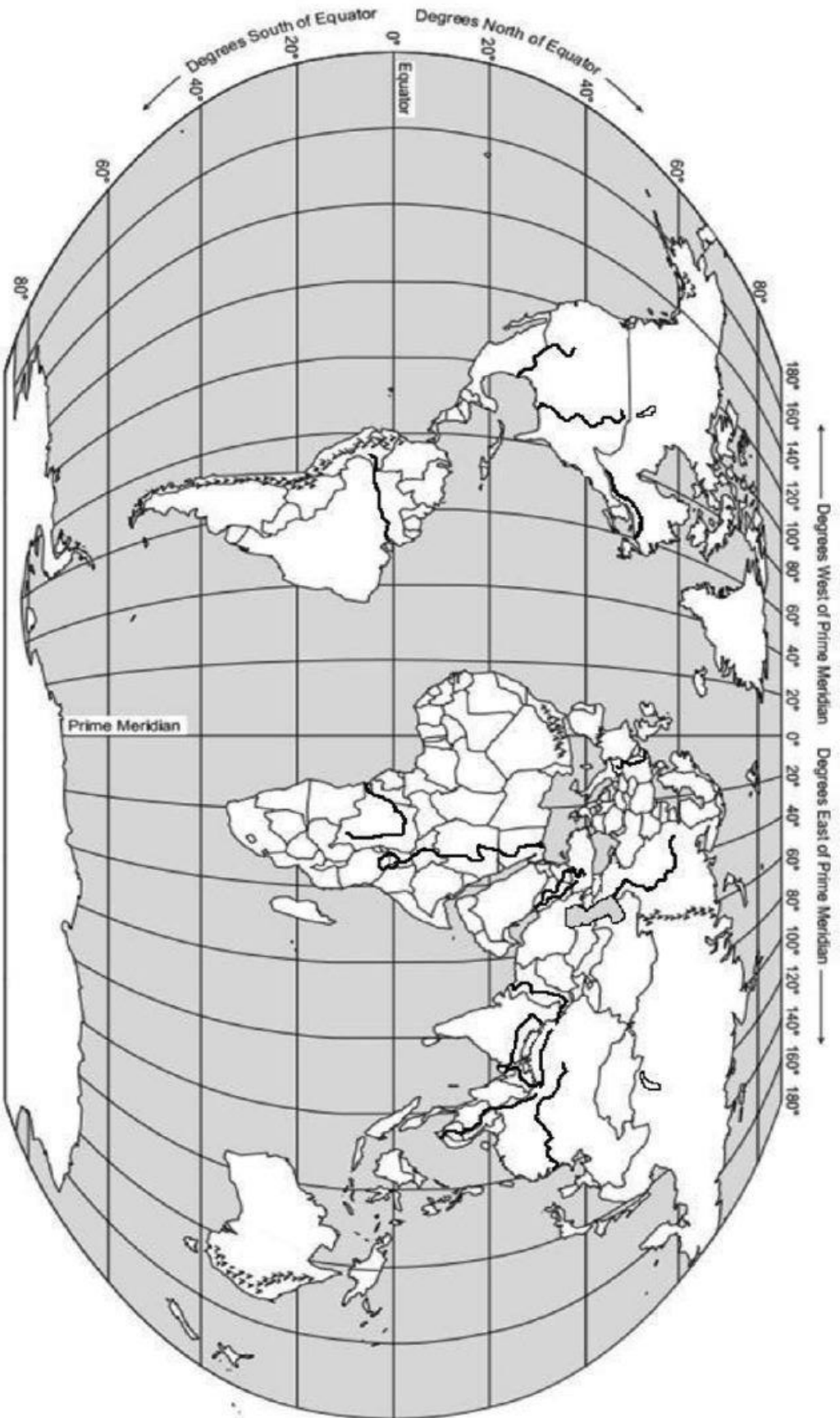
Map 2: Land Features



Label the following:

- | | | | | |
|--------------|-----------------|------------|------------------|--------------|
| 1. Rockies | 4. Appalachians | 7. Sahara | 10. Urals | 13. Kalahari |
| 2. Himalayas | 5. Caucasus | 8. Alps | 11. Rub al Khali | 14. Namib |
| 3. Gobi | 6. Andes | 9. Atacama | 12. Patagonia | |

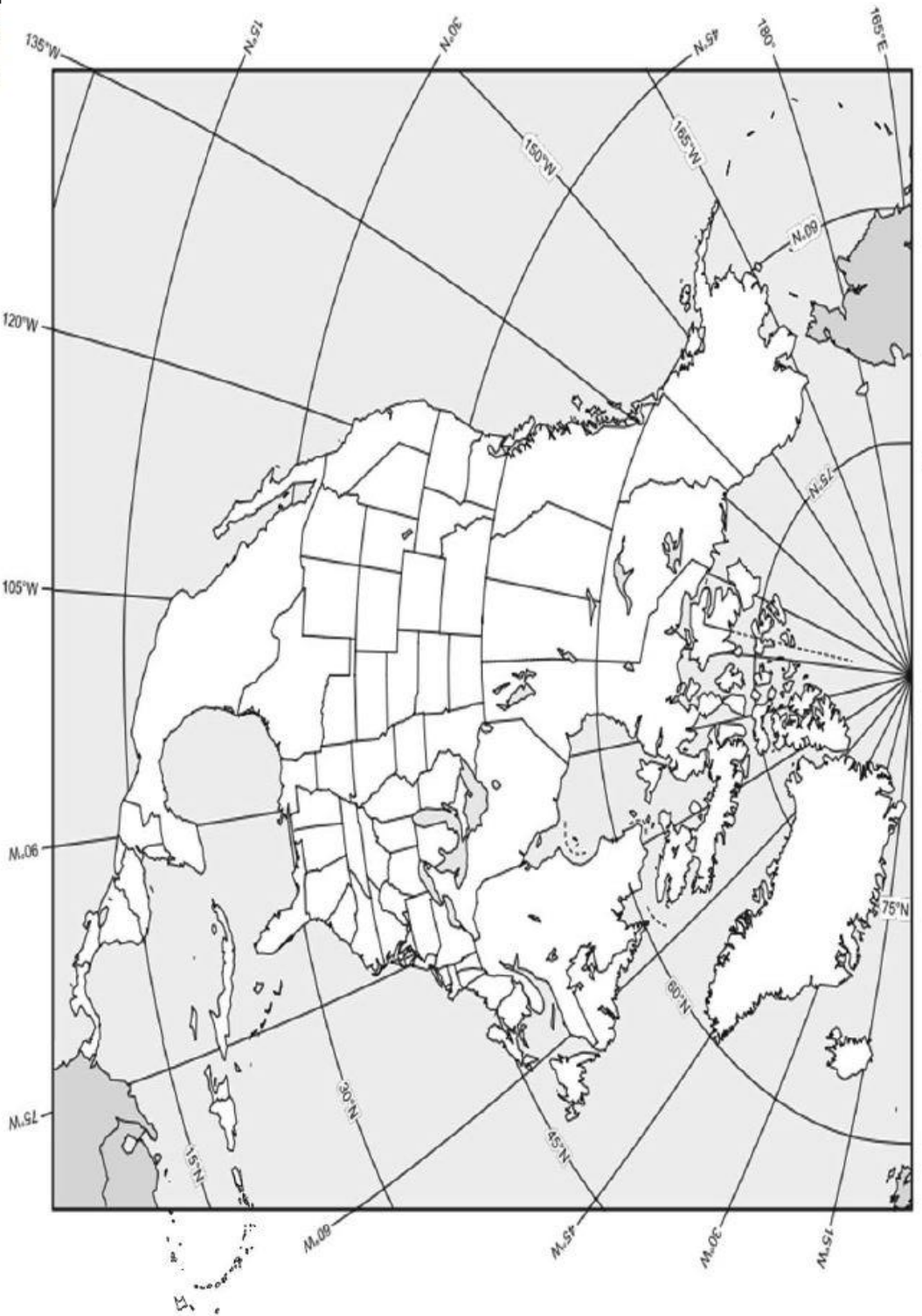
Map 3: Rivers and Lakes



Label the following:

- | | | | | |
|----------------------|----------------------|-------------------|-------------------|------------------------|
| 1. Brahmaputra River | 6. Mississippi River | 11. Ganges River | 16. Lake Superior | 21. Rio Grande River |
| 2. Tigris River | 7. Indus River | 12. Congo River | 17. Lake Michigan | 22. Lake Balkal |
| 3. Euphrates River | 8. Mekong River | 13. Volga River | 18. Lake Erie | 23. St. Lawrence River |
| 4. Yangtze River | 9. Amazon River | 14. Lake Winnipeg | 19. Lake Ontario | |
| 5. Nile River | 10. Lake Victoria | 15. Rhine River | 20. Lake Huron | |

Map 5: North America and the Caribbean



Label the following:

1. Bahamas
2. Trinidad and Tobago
3. Honduras
4. United States
5. Managua
6. Cuba
7. Belize
8. Mexico
9. Greenland
10. Mexico City
11. Dominican Republic
12. Costa Rica
13. Nicaragua
14. Chicago
15. New York City
16. Haiti
17. El Salvador
18. Panama
19. Havana
20. Ottawa
21. Jamaica
22. Guatemala
23. Canada
24. Los Angeles
25. Washington DC

Map 6: South America



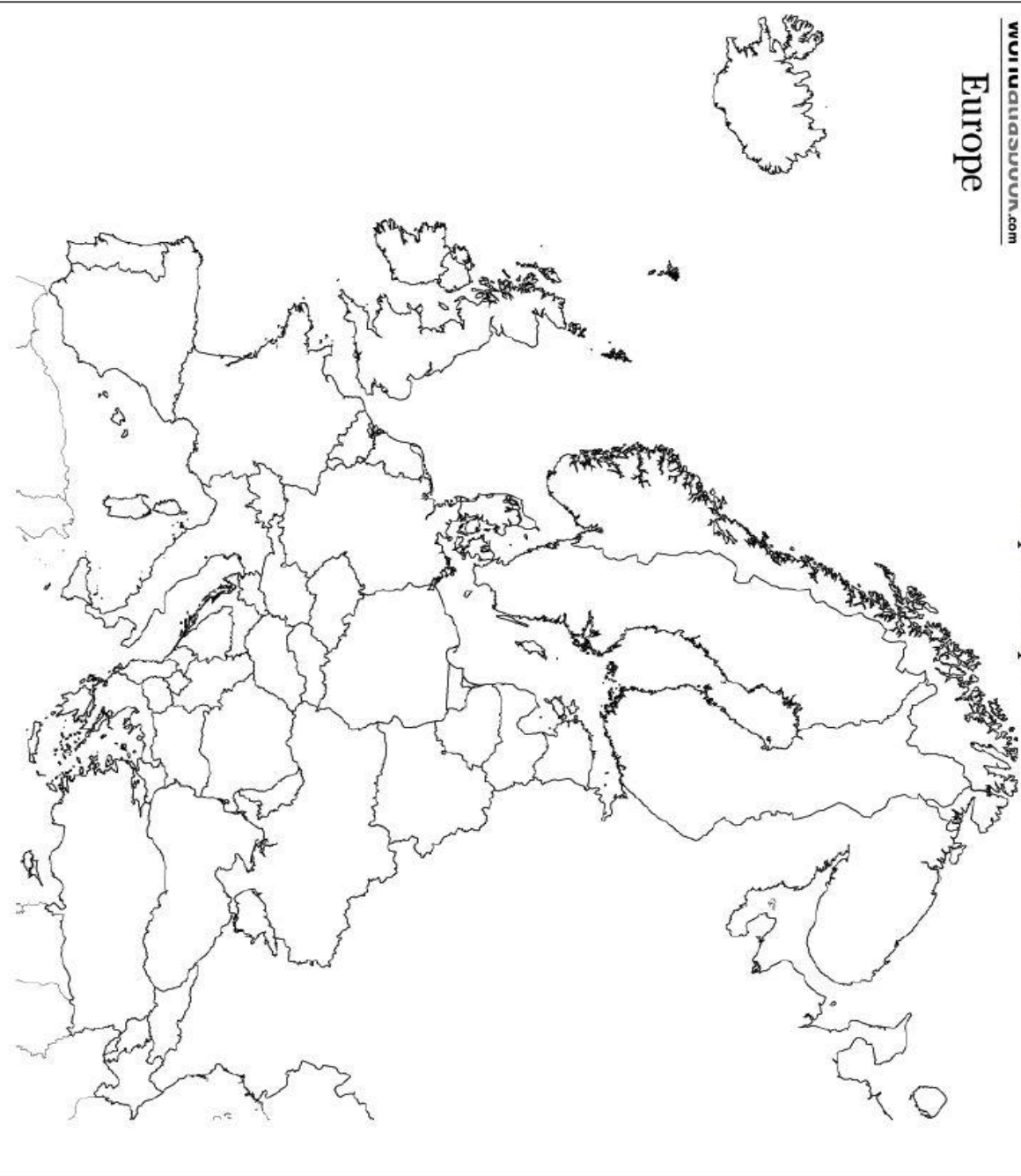
Label the following:

- | | | | | |
|--------------|-------------------|---------------|----------------------|--------------|
| 1. Argentina | 6. Colombia | 11. Uruguay | 16. French Guiana | 21. Lima |
| 2. Ecuador | 7. Paraguay | 12. Chile | 17. Buenos Aires | 22. Brasília |
| 3. Peru | 8. Venezuela | 13. São Paulo | 18. Bolivia | |
| 4. Caracas | 9. Rio de Janeiro | 14. Suriname | 19. Falkland Islands | |
| 5. Santiago | 10. Guyana | 15. Brazil | 20. Bogotá | |

www.tudugadu.com

Europe

Map 7: Europe



Label the following:

1. The Hague

2. Rome

3. Moscow

4. London

5. St. Petersburg

6. Brussels

7. Paris

8. Madrid

9. Berlin

10. Switzerland

11. Netherlands

12. Monaco

13. Luxembourg

14. Liechtenstein

15. Germany

16. France

17. Belgium

18. Austria

19. Spain

20. Slovenia

21. Serbia

22. San Marino

23. Portugal

24. Montenegro

25. Malta

26. Macedonia

27. Italy

28. Holy See (Vatican City)

29. Greece

30. Croatia

31. Bosnia and Herzegovina

32. Andorra

33. Albania

34. Belarus

35. Poland

36. Denmark

37. Latvia

38. Bulgaria

39. Romania

40. Estonia

41. Lithuania

42. Czech Republic

43. Russia

44. Finland

45. Norway

46. Hungary

47. Slovakia

48. Iceland

49. Sweden

50. Moldova

51. Ukraine

52. Ireland

53. United Kingdom

54. Kosovo

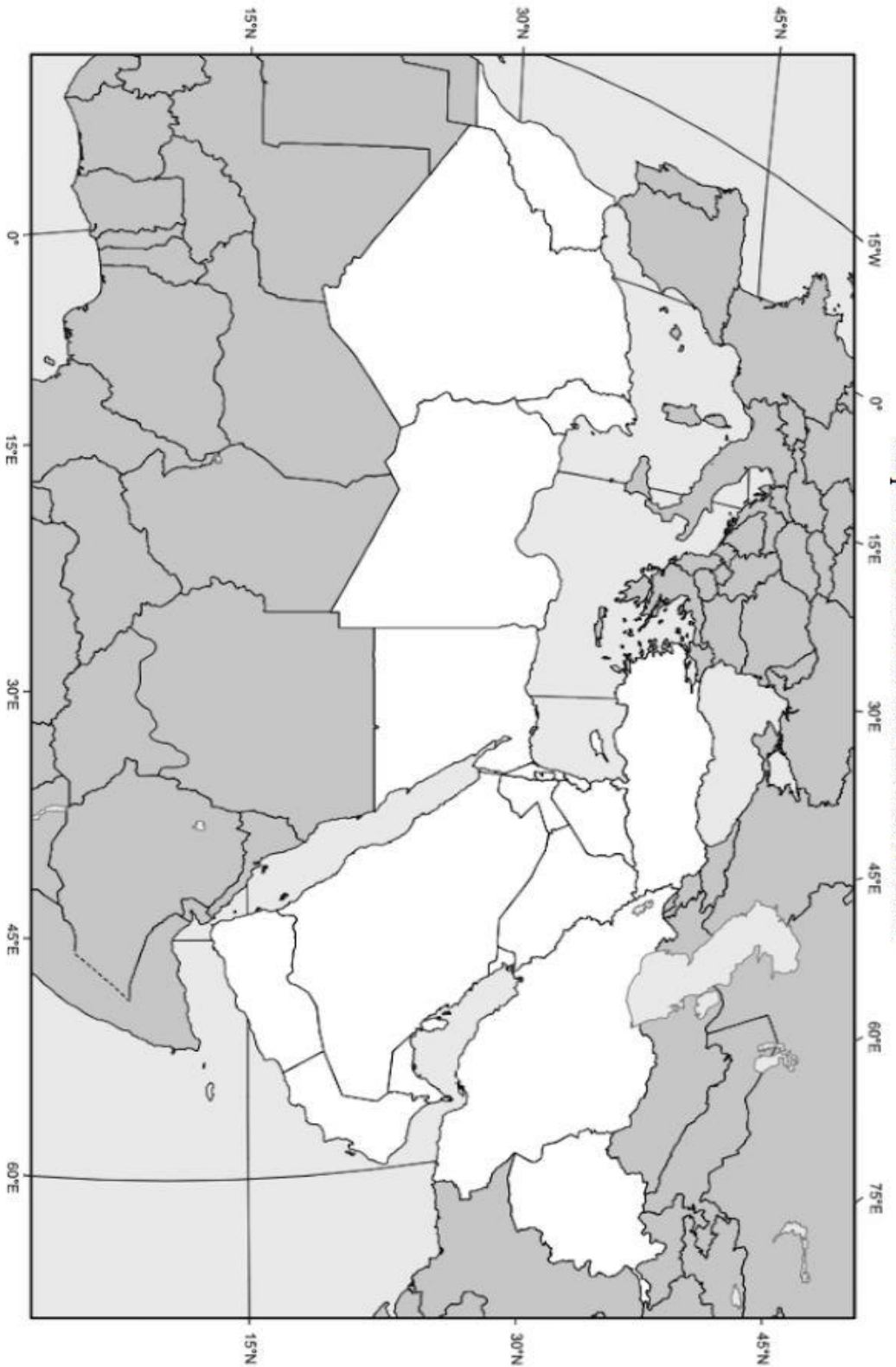
Map 8: Sub-Saharan Africa



Label the following:

- | | | | | |
|-----------------|------------------|-------------------|---------------------|-----------|
| 1. Burundi | 12. Djibouti | 23. Eritrea | 34. Ethiopia | 45. Niger |
| 2. Madagascar | 13. Botswana | 24. Chad | 35. Rwanda | |
| 3. Somalia | 14. South Sudan | 25. Uganda | 36. Tanzania | |
| 4. Zimbabwe | 15. Angola | 26. Cameroon | 37. Central African | |
| 5. Congo | 16. Togo | 27. Zambia | 38. Ghana | |
| 6. Lesotho | 17. Namibia | 28. South Africa | 39. Swaziland | |
| 7. Burkina Faso | 18. Cape Verde | 29. Côte d'Ivoire | 40. Gambia | |
| 8. Benin | 19. Liberia | 30. Mali | 41. Mauritania | |
| 9. Nigeria | 20. Senegal | 31. Sierra Leone | 42. Democratic | |
| 10. Addis Ababa | 21. Cape Town | 32. Lagos | 43. Nairobi | |
| 11. Mogadishu | 22. Johannesburg | 33. Accra | 44. Kenya | |

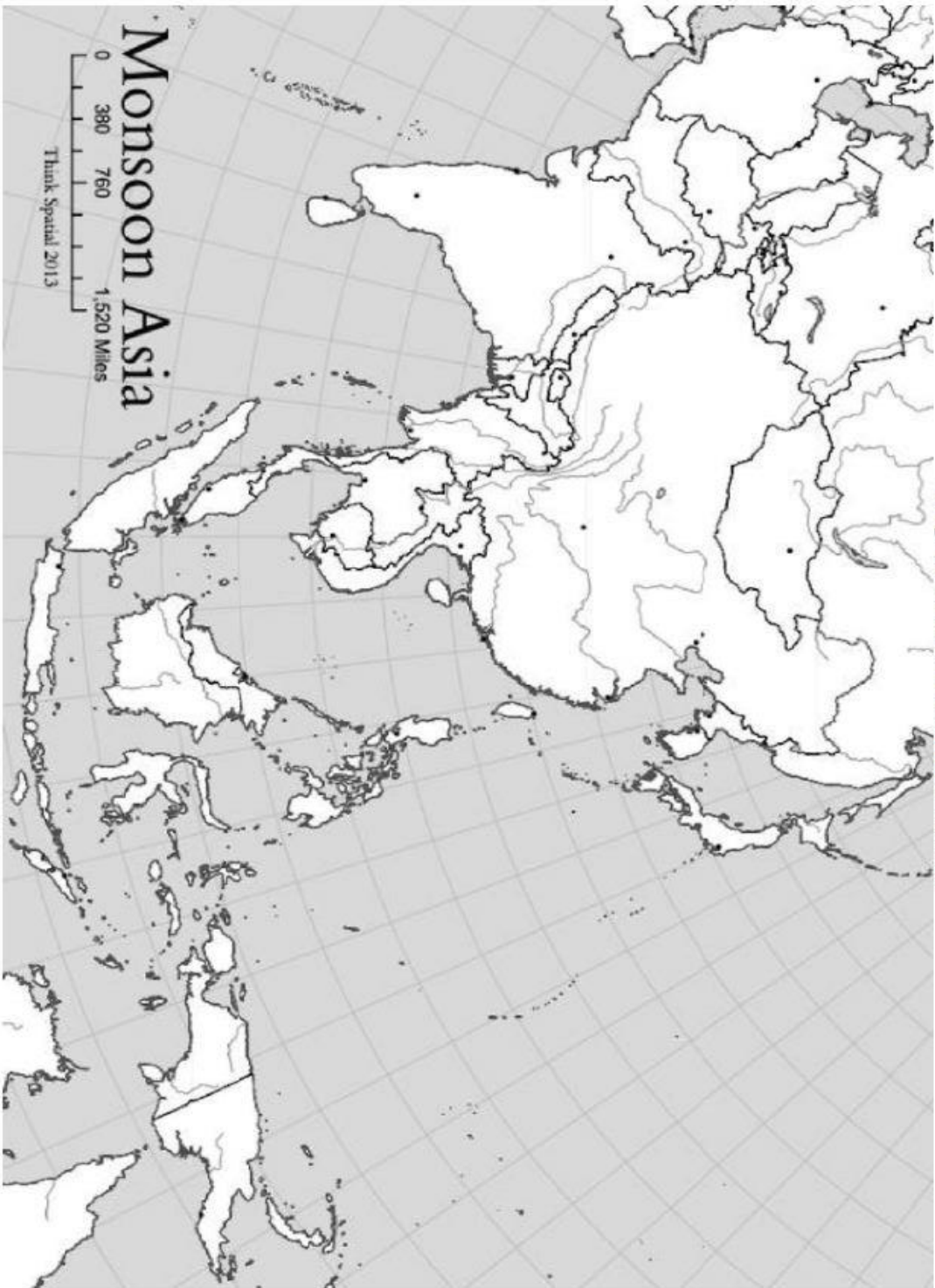
Map 9: North Africa and the Middle East



Label the following:

1. Algeria
2. Tunisia
3. Georgia
4. Lebanon
5. Syria
6. Beirut
7. Tehran
8. Egypt
9. Armenia
10. Iraq
11. Oman
12. Turkey
13. Cairo
14. Tripoli
15. Libya
16. Azerbaijan
17. Israel
18. Palestine
19. United Arab Emirates
20. Damascus
21. Mecca
22. Morocco
23. Jerusalem
24. Jordan
25. Qatar
26. Yemen
27. Istanbul
28. Medina
29. Sudan
30. Cyprus
31. Kuwait
32. Saudi Arabia
33. Baghdad
34. Iran
35. Afghanistan

Map 10: East and Southeast Asia



Label the following:

- | | | | | |
|----------------------|------------------------|----------------------|----------------------------|------------------------|
| 1. <i>Tokyo</i> | 6. <i>Jakarta</i> | 11. <i>Vietnam</i> | 16. <i>Philippines</i> | 21. <i>North Korea</i> |
| 2. <i>Shanghai</i> | 7. <i>Japan</i> | 12. <i>Hong Kong</i> | 17. <i>Myanmar (Burma)</i> | 22. <i>Cambodia</i> |
| 3. <i>Seoul</i> | 8. <i>Beijing</i> | 13. <i>Thailand</i> | 18. <i>China</i> | 23. <i>Brunei</i> |
| 4. <i>Pyeongwang</i> | 9. <i>Bangkok</i> | 14. <i>Singapore</i> | 19. <i>Laos</i> | 24. <i>Mongolia</i> |
| 5. <i>Taiwan</i> | 10. <i>Timor-Leste</i> | 15. <i>Malaysia</i> | 20. <i>South Korea</i> | 25. <i>Indonesia</i> |

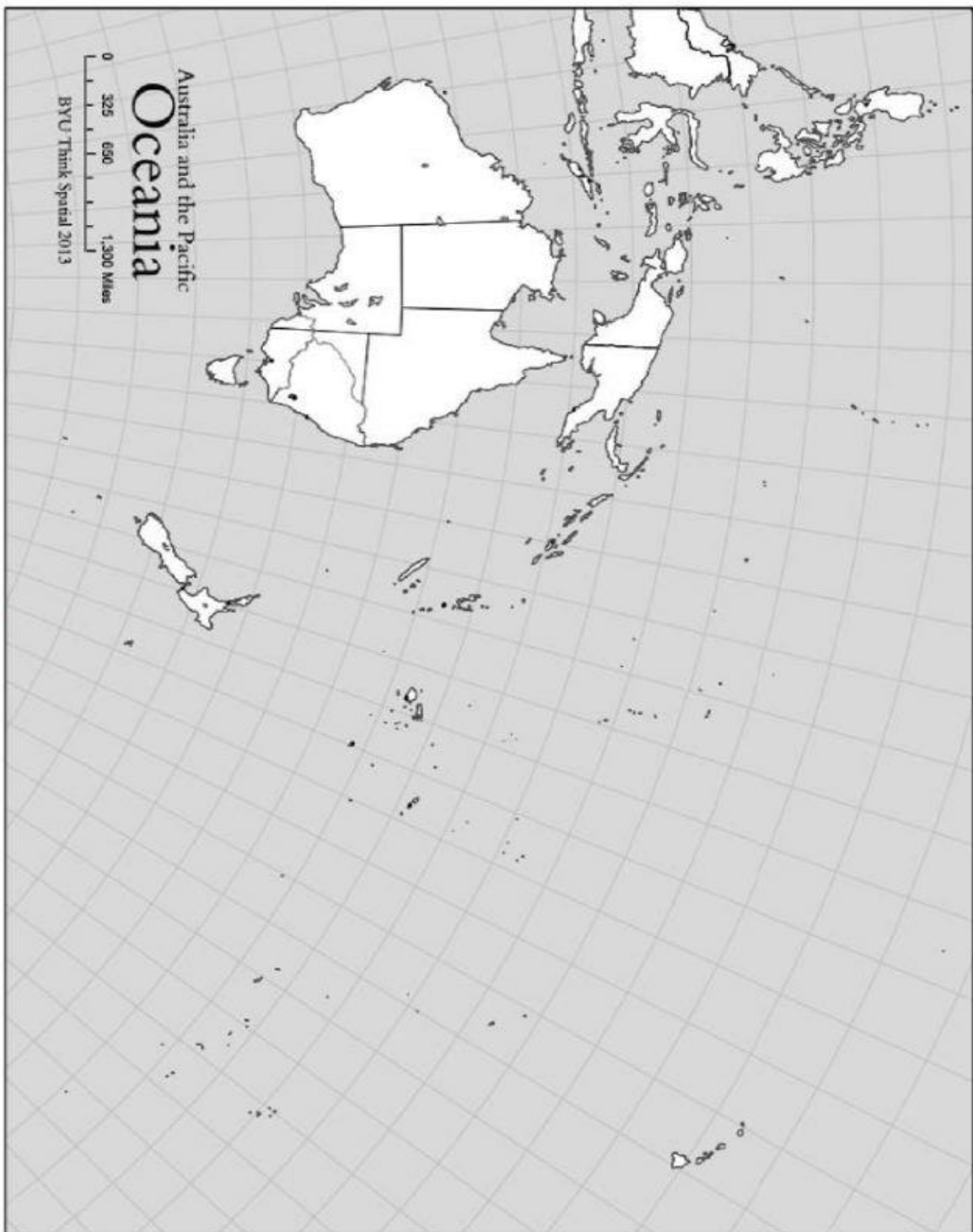
Map 11: Central and South Asia



Label the following:

- | | | | | |
|---------------|---------------|-----------------|----------------|----------------|
| 1. Sri Lanka | 4. Pakistan | 7. Nepal | 10. Maldives | 13. India |
| 2. Bhutan | 5. Bangladesh | 8. Kashmir | 11. Kazakhstan | 14. Uzbekistan |
| 3. Kyrgyzstan | 6. Tajikistan | 9. Turkmenistan | 12. Calcutta | 15. New Delhi |

Map 12: Oceania



Label the following and draw a circle around Micronesia, Melanesia, and Polynesia.

- | | | | | |
|--------------|--------------|----------------|--------------|---------------------|
| 1. Sydney | 3. Auckland | 5. New Zealand | 7. Polynesia | 9. Papua New Guinea |
| 2. Melbourne | 4. Australia | 6. Micronesia | 8. Melanesia | |